
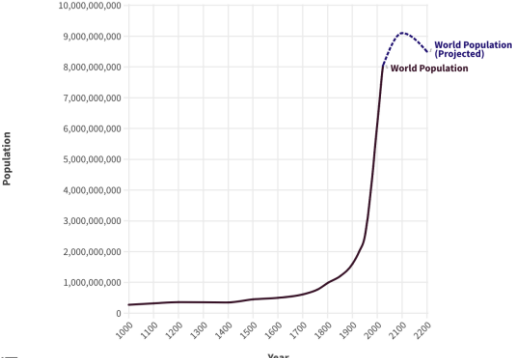


Urban Issues and Challenges - Urbanisation


 **Global population growth**

Using the graph, describe global population growth.





Quiz Attempt:

1. _____ /5 2. _____ /5 3. _____ /5

 **Urbanisation**


What is meant by the term urbanisation?

Give two reasons for urbanisation.

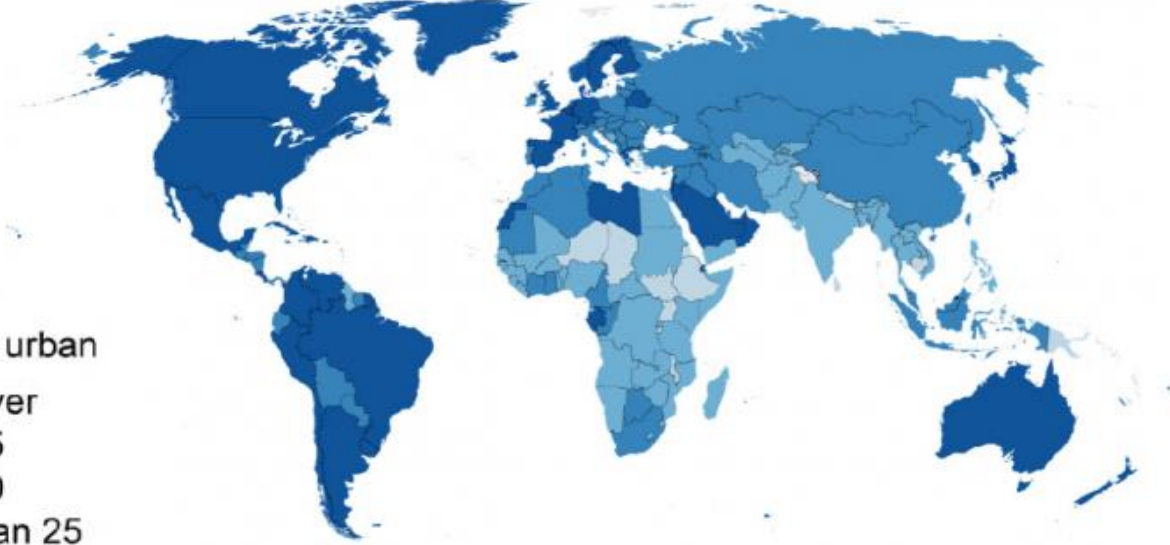
 

Quiz Attempt:

1. _____ /2 2. _____ /2 3. _____ /2

 **Global urban population**

Annotate the map to give an overview of the global urban population.




Percentage urban

- 75 or over
- 50 to 75
- 25 to 50
- Less than 25
- No data

Quiz Attempt:

1. _____ /5 2. _____ /5 3. _____ /5

 **The global pattern of urban change**

Where and why did urbanisation first occur?

Where is urbanisation the highest?

Where are rates of urbanisation now greatest? Why?

Quiz Attempt:

1. _____ /8 2. _____ /8 3. _____ /8

Urban Issues and Challenges - Urbanisation



Factors affecting urbanisation rates

What is natural increase?

What is rural to urban migration?

What is a push factor in rural to urban migration?

What is a pull factor in rural to urban migration?

Identify and explain three push factors in rural-urban migration.

Identify and explain three pull factors in rural-urban migration.



Quiz Attempt:

1. ____ /14 2. ____ /14 3. ____ /14



Megacities

What is a mega city?

Identify the first four megacities.

How many megacities are there in the world today?



Quiz Attempt:

1. ____ /5 2. ____ /5 3. ____ /5



Mind Map

Create a mind map from memory to summarise this topic. When you're done check your mind map against these notes and update.



Exam Practice

Apply your learning - scan the QR code and attempt the exam questions.



The global distribution of megacities

Annotate the map to describe and explain the global distribution of megacities.

Megacities (2024)


Population 2024 ○ 4,000,000 ○ 15,000,000 ○ 40,000,000



Quiz Attempt:


1. ____ /6 2. ____ /6 3. ____ /6


Urban Issues and Challenges – Rio Case Study



Location


Identify the location of Rio on the map below. Describe the location of Rio.





Quiz Attempt:

1. _____ /9 2. _____ /9 3. _____ /9




Importance

What is the regional importance of Rio?


What is the national importance of Rio?

What is the international importance of Rio?

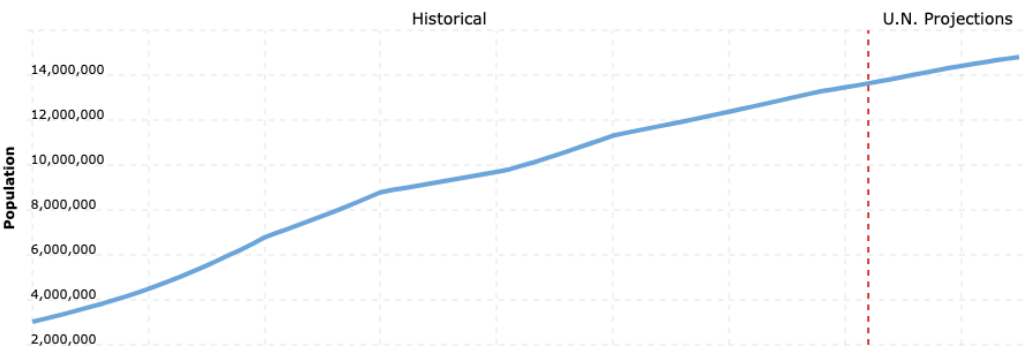


Quiz Attempt:

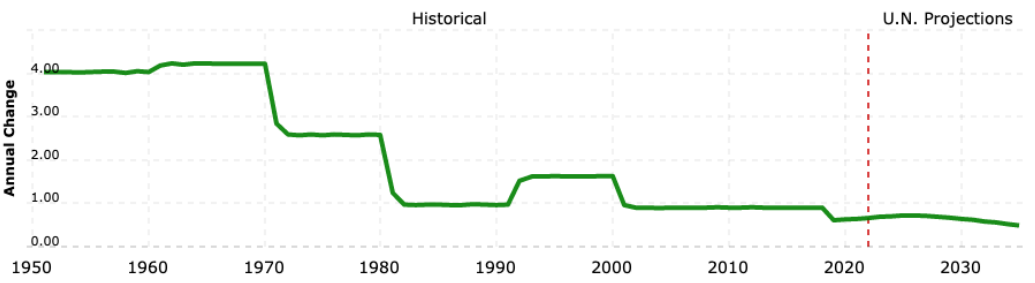
1. _____ /8 2. _____ /8 3. _____ /8





The growth of Rio




Describe the population growth of Rio.




Outline the reasons for the growth of its population.





Quiz Attempt:


1. _____ /10 2. _____ /10 3. _____ /10



Push and Pull Factors

Outline the push and pull factors that lead to rural to urban migration.



Quiz Attempt:

1. _____ /10 2. _____ /10 3. _____ /10

Urban Issues and Challenges – Rio Case Study



Social opportunities

Outline the social opportunities of urban growth in Rio.



Quiz Attempt:

1. _____ /11 2. _____ /11 3. _____ /11



Economic opportunities

Outline how industrial areas have stimulated economic growth in Rio.

What opportunities are available in the informal economy of Rio?



Quiz Attempt:

1. _____ /13 2. _____ /13 3. _____ /13



Urban growth challenges

What are informal (favela) settlements?

What are the typical characteristics of informal (favela) settlements?

What are the challenges associated with informal settlements in Rio?

Residents:

City authorities:



Quiz Attempt:

1. _____ /10 2. _____ /10 3. _____ /10

Urban Issues and Challenges – Rio Case Study



Urban growth challenges

Outline the social and economic challenges of urban growth in Rio.



Quiz Attempt:

1. _____ /10 2. _____ /10 3. _____ /10



Urban growth challenges – environmental issues

Outline how industrial areas can be a stimulus for economic development.



Quiz Attempt:

1. _____ /10 2. _____ /10 3. _____ /10



Mind Map

Create a mind map from memory to summarise this topic. When you're done check your mind map against these notes and update.



Exam Practice

Apply your learning - scan the QR code and attempt the exam questions.



Urban planning improving the quality of life for the urban poor.

Give an overview of how urban planning is improving the quality of life for the urban poor of Rio.



Quiz Attempt:

1. _____ /10 2. _____ /10 3. _____ /10

BRISTOL

www.internetgeography.net/topics/Bristol-case-study

Why is Bristol important?

What are the impacts of national and international migration?

National

International

Opportunities in Bristol

Urban Regeneration (Temple Quarter)

Background (Why was it needed?)

Challenges in Bristol

What have they done / how has it improved the area?